
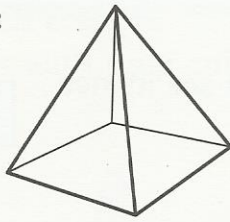


Pyramid, triangular prism


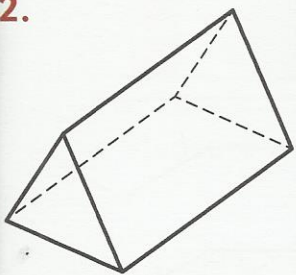
1. (a) This is a **pyramid**. It has:

- ___ flat faces.
- ___ straight edges.
- ___ vertices.



(b) If I trace around the faces,
I will draw 1 _____
and 4 _____.

2.

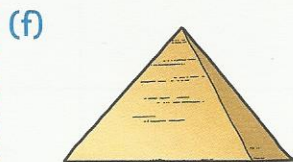






(a) This is a **triangular prism**. It has:

- ___ flat faces.
- ___ straight edges.
- ___ vertices.

(b) If I trace around the faces,
I will draw 2 _____
and 3 _____.

3. What 3-D shapes do you see? Write each answer underneath the shape.



Challenge

How many cubes are used to make this shape? _____ cubes

